














 $5 + 3 =$ <input type="text"/>	 $8 - 5 =$ <input type="text"/>
 $6 + 2 =$ <input type="text"/>	 $7 - 3 =$ <input type="text"/>
 $4 + 4 =$ <input type="text"/>	 $10 - 5 =$ <input type="text"/>
 $7 + 3 =$ <input type="text"/>	 $9 - 7 =$ <input type="text"/>

 $5 \times 3 =$ <input type="text"/>	 $8 : 2 =$ <input type="text"/>
 $6 \times 2 =$ <input type="text"/>	 $6 : 3 =$ <input type="text"/>
 $4 \times 4 =$ <input type="text"/>	 $10 : 5 =$ <input type="text"/>
 $7 \times 3 =$ <input type="text"/>	 $9 : 3 =$ <input type="text"/>

